

SECTION A

1. What is the main natural source of light and heat in the environment?

2. Name one product we get from bees

3. Name any one non-living thing in your classroom.

4. Which part of sugarcane is eaten by man?

5. Mention any one childhood immunisable disease that affects children.

6. Apart from living organisms, give any other one component of soil.

7. Name any one domestic animal.

8. How can people make water safe for drinking?

9. What is the body sense organ for hearing?

10. Name the type of weather shown below.



11. In which season do farmers plant their seeds?

12. What is soil erosion?


13. Mention one item children use for playing at school.

14. Which type of soil is the best for making pots?

15. Name one tool people use for eating.

16. Mention one process involved in soil formation.

17. Name the garden tool below.



18. Why do people wash their hands with soap after visiting the toilet or pit latrine? _____

19. Mention any one natural change in the environment.

20. Give one use of water to man.

21. How do people care for their animals?

22. In the space below, draw any one item we use to keep our bodies clean.



23. Name any one accident that happens at school.

24. How many main body parts does an insect have?

25. Give one item people use on a rainy day.

26. Name the garden tool used for transplanting seedlings.

27. Why do animals move from one place to another?

28. Name the animal which coils for protection

29. Write down one item we use to keep the classroom clean.

30. What is the best food for babies?

31. Give one layer of soil.

32. What is environment?

33. Mention one product got from domestic birds.

34. Write down any one useful insect in our environment.

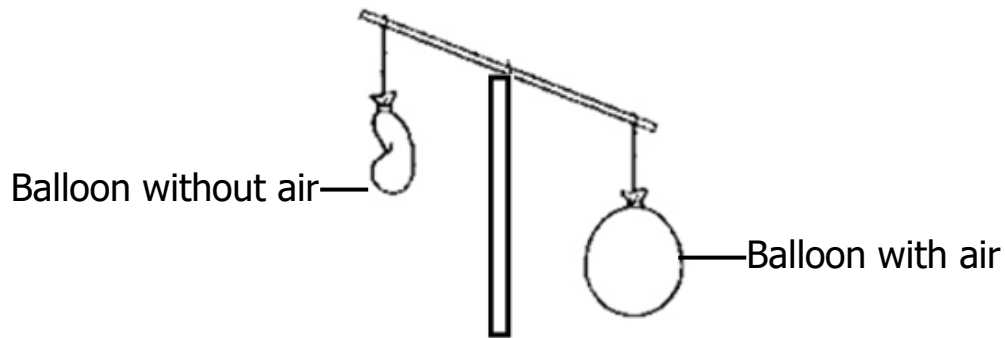
35. Name the gas that occupies the biggest percentage in the atmosphere.

36. Sunshine is to sunny weather as rainfall is to

37. Name the type of soil suitable for glass making.

38. Give the young one of a pig.

39. Name the property of air shown below.



40. Where do we dispose off faeces at home?

SECTION B

41 a) Write down one class of food.

b) Give any two food stuffs people eat.

i) _____ ii) _____

c) Why do people eat food?

42. **Complete correctly**

Habitat	Animals
	fish
soil	
	bird
hutch	

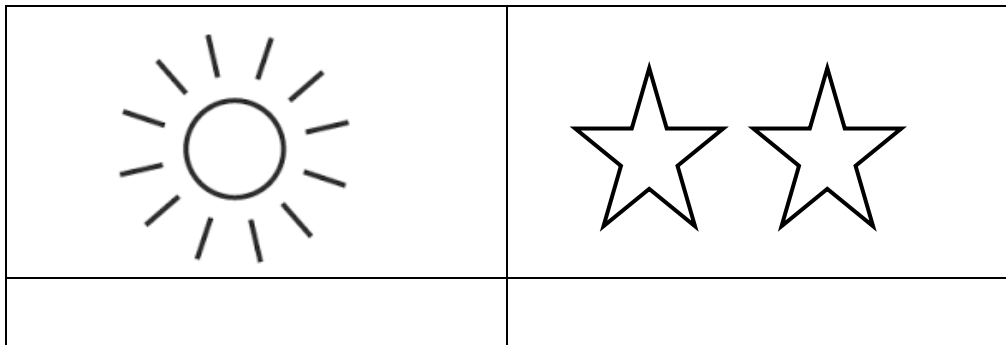
43 a) What is air? _____

b) Mention two gases that make up air.

i) _____ ii) _____

c) Why is carbon dioxide used in fire extinguishers?

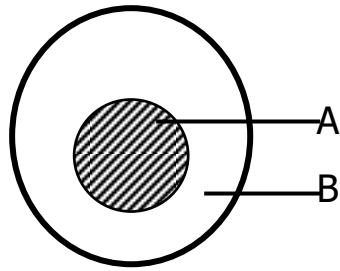
44 a) Name these natural sources of light in the environment.



b) Give one danger of too much sunshine.

c) Write one use of a sun?

45. **Study the diagram below and use it to answer the questions.**



a) Name the parts of the shadow marked A and B

A _____ B _____

b) At what time of the day do shadows appear shortest?

c) How are shadows useful to people?

46 a) Write down the living components of the environment.

i) _____ ii) _____

b) Mention any one wild animal in our environment.

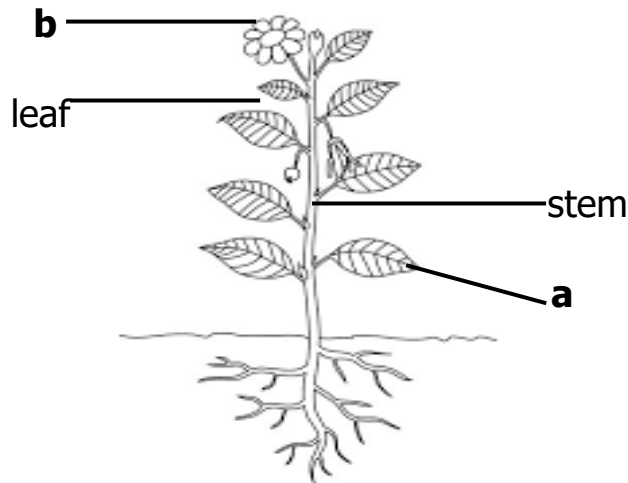
c) Name one animal that eats grass.

47 a) Write down two main sources of food.

i) _____ ii) _____

b) Draw and name two things we use to harvest water.

48. Use the diagram below to answer the questions that follow.



a) Name the parts of a flowering plant marked

a _____ b _____

b) Which gas help plants to make their own food?

c) Give one way farmers care for their plants.

49. a) What is germination? _____

b) Write three conditions necessary for seed germination.

i) _____ (ii) _____

iii) _____


50. State two things that are made out of clay.

i) _____ ii) _____

b) Apart from clay soil, mention any other two types of soil.

i) _____ ii) _____

51. Name these basic needs of man.



b) Give one method of preserving food.

c) Mention one way people keep their clothes clean.

52. a) Mention two items found in the first aid kit.

i) _____ ii) _____

b) Give two reasons why we give first aid.

i) _____

ii) _____

53 a) Write down two agents of soil erosion.

i) _____

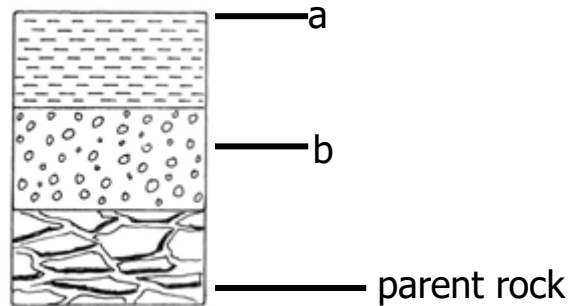
ii) _____

b) Mention two causes of soil erosion.

i) _____

ii) _____

54. Study the diagram and answer the questions.



a) Name the layers marked a and b

a _____ b _____

b) Why is top soil the best for crop growing?

c) Mention one place where the soil profile can be seen.

55. Use the words given in brackets to complete the sentences.

Mulching, soil erosion,
dry, banana leaves,
mulches, fertility

_____ is the covering of top soil using

_____ plant materials. Farmers use _____

like banana leaves, dry grass and coffee husks to mulch their gardens.

Mulching helps to control soil erosion and also helps to improve on soil

THE END